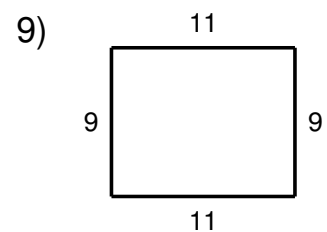
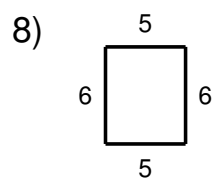
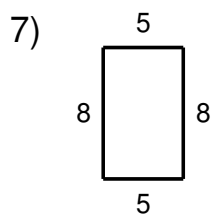
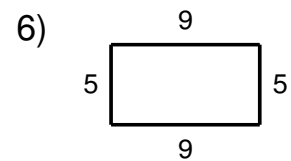
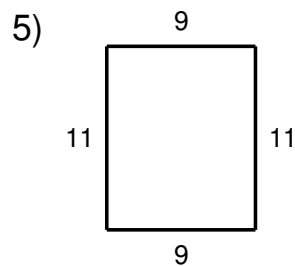
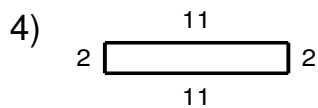
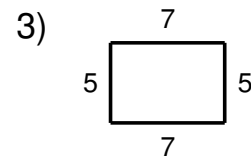
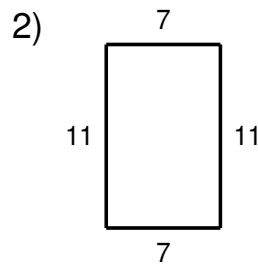
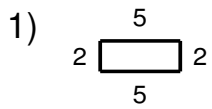


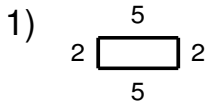
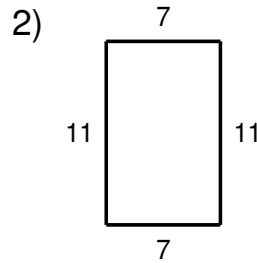
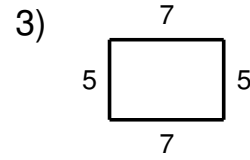
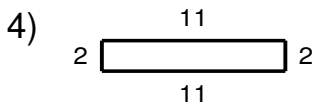
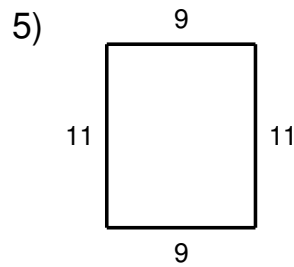
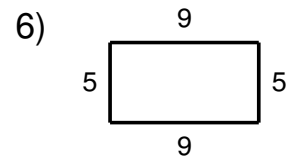
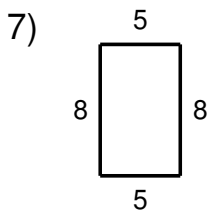
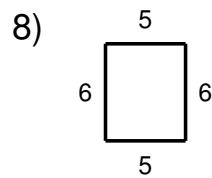
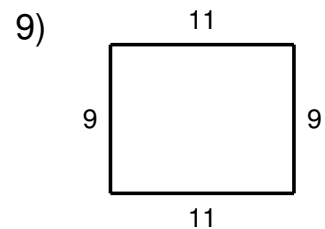
## Perimeter of a Rectangle

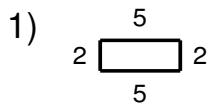
Date \_\_\_\_\_ Period \_\_\_\_\_

**Find the perimeter of each rectangle.**

## Perimeter of a Rectangle

Date \_\_\_\_\_ Period \_\_\_\_\_

**Find the perimeter of each rectangle.****Answer: 14****Answer: 36****Answer: 24****Answer: 26****Answer: 40****Answer: 28****Answer: 26****Answer: 22****Answer: 40**

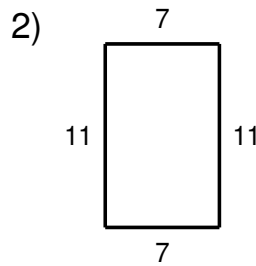
**Solution Steps**

$$\text{Perimeter} = 2 * \text{Length} + 2 * \text{Width}$$

$$\text{Perimeter} = 2 * 5 + 2 * 2$$

$$\text{Perimeter} = 10 + 4$$

$$\text{Perimeter} = 14$$

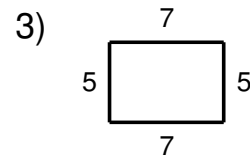


$$\text{Perimeter} = 2 * \text{Length} + 2 * \text{Width}$$

$$\text{Perimeter} = 2 * 7 + 2 * 11$$

$$\text{Perimeter} = 14 + 22$$

$$\text{Perimeter} = 36$$

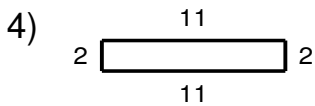


$$\text{Perimeter} = 2 * \text{Length} + 2 * \text{Width}$$

$$\text{Perimeter} = 2 * 7 + 2 * 5$$

$$\text{Perimeter} = 14 + 10$$

$$\text{Perimeter} = 24$$

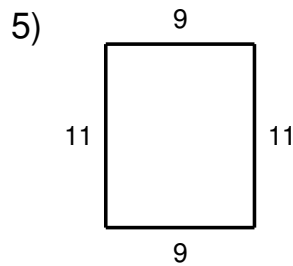


$$\text{Perimeter} = 2 * \text{Length} + 2 * \text{Width}$$

$$\text{Perimeter} = 2 * 11 + 2 * 2$$

$$\text{Perimeter} = 22 + 4$$

$$\text{Perimeter} = 26$$

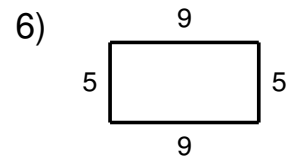


$$\text{Perimeter} = 2 * \text{Length} + 2 * \text{Width}$$

$$\text{Perimeter} = 2 * 9 + 2 * 11$$

$$\text{Perimeter} = 18 + 22$$

$$\text{Perimeter} = 40$$

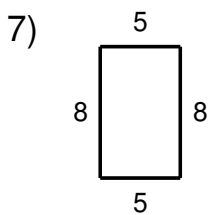


$$\text{Perimeter} = 2 * \text{Length} + 2 * \text{Width}$$

$$\text{Perimeter} = 2 * 9 + 2 * 5$$

$$\text{Perimeter} = 18 + 10$$

$$\text{Perimeter} = 28$$

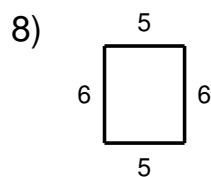


$$\text{Perimeter} = 2 * \text{Length} + 2 * \text{Width}$$

$$\text{Perimeter} = 2 * 5 + 2 * 8$$

$$\text{Perimeter} = 10 + 16$$

$$\text{Perimeter} = 26$$

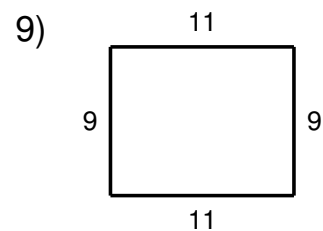


$$\text{Perimeter} = 2 * \text{Length} + 2 * \text{Width}$$

$$\text{Perimeter} = 2 * 5 + 2 * 6$$

$$\text{Perimeter} = 10 + 12$$

$$\text{Perimeter} = 22$$



$$\text{Perimeter} = 2 * \text{Length} + 2 * \text{Width}$$

$$\text{Perimeter} = 2 * 11 + 2 * 9$$

$$\text{Perimeter} = 22 + 18$$

$$\text{Perimeter} = 40$$